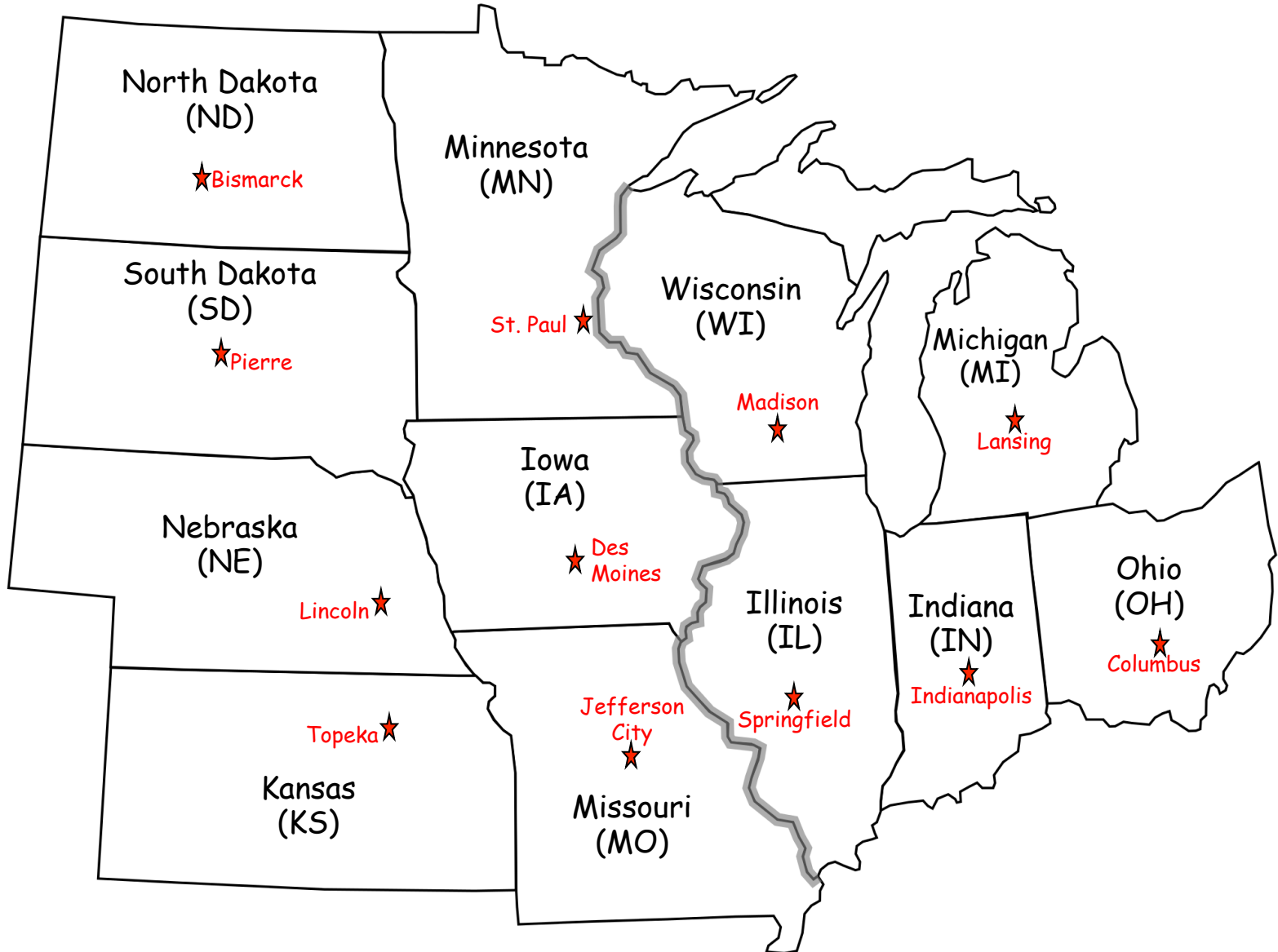


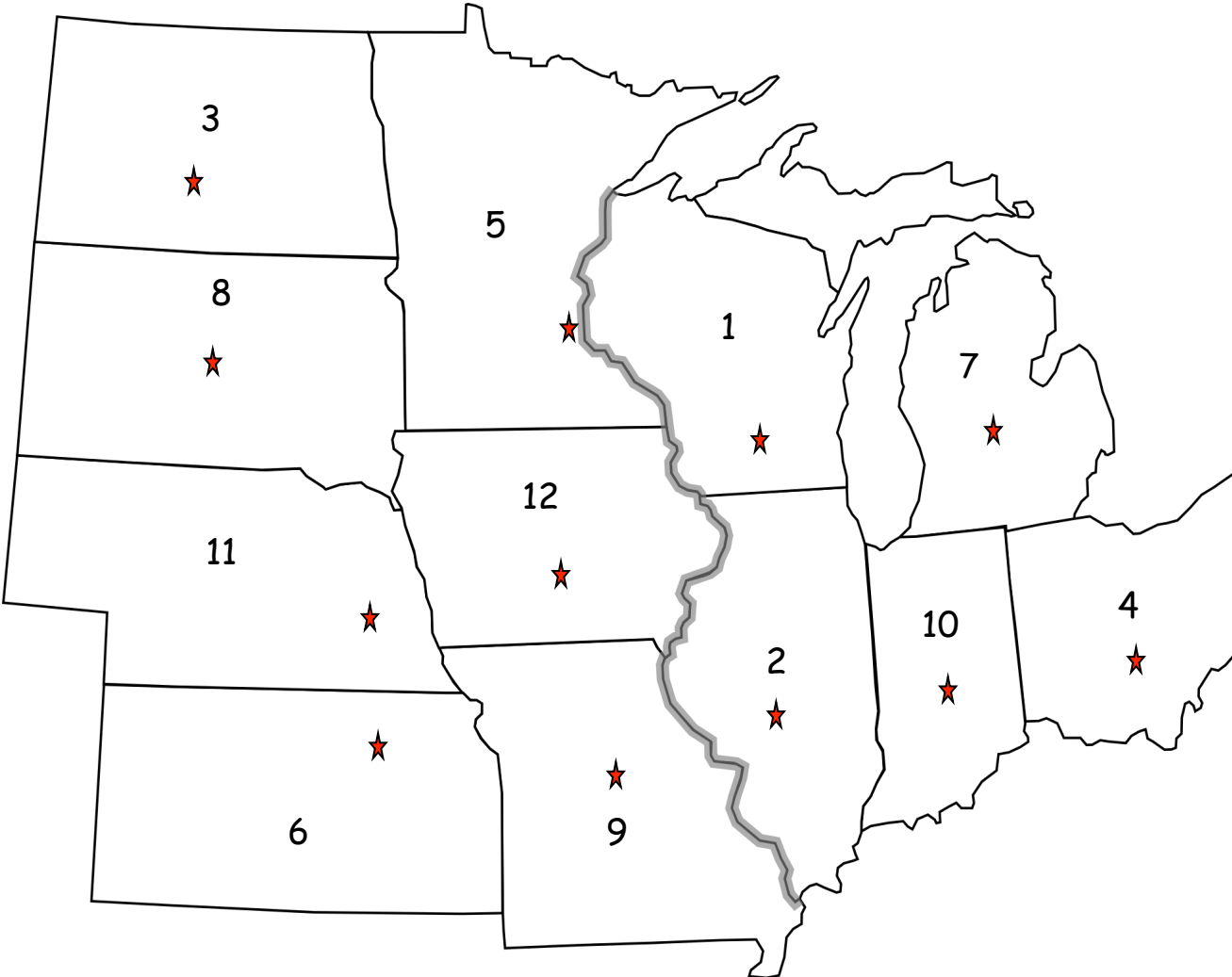
3<sup>rd</sup> Grade- Study Guide  
The United States  
Midwest Region



3<sup>rd</sup> Grade- Practice Test #3  
The United States  
Midwest Region

Directions:

Take a look at your map. Write the number of each state on the line that is after it's name.



- (IL) Illinois \_\_\_\_\_
- (IN) Indiana \_\_\_\_\_
- (IA) Iowa \_\_\_\_\_
- (KS) Kansas \_\_\_\_\_
- (MI) Michigan \_\_\_\_\_
- (MN) Minnesota \_\_\_\_\_
- (MO) Missouri \_\_\_\_\_
- (NE) Nebraska \_\_\_\_\_
- (ND) North Dakota \_\_\_\_\_
- (OH) Ohio \_\_\_\_\_
- (SD) South Dakota \_\_\_\_\_
- (WI) Wisconsin \_\_\_\_\_

3<sup>rd</sup> Grade- Practice Test #3  
The United States  
Midwest Region

States' Capitals

Directions:  
Write the state abbreviation next to the correct capital.

Bismarck _____	Lincoln _____
Columbus _____	Madison _____
Des Moines _____	Pierre _____
Indianapolis _____	St. Paul _____
Jefferson City _____	Springfield _____
Lansing _____	Topeka _____

IL (Illinois)

IN (Indiana)

IA (Iowa)

KS (Kansas)

MI (Michigan)

MN (Minnesota)

MO (Missouri)

NE (Nebraska)

ND (North Dakota)

OH (Ohio)

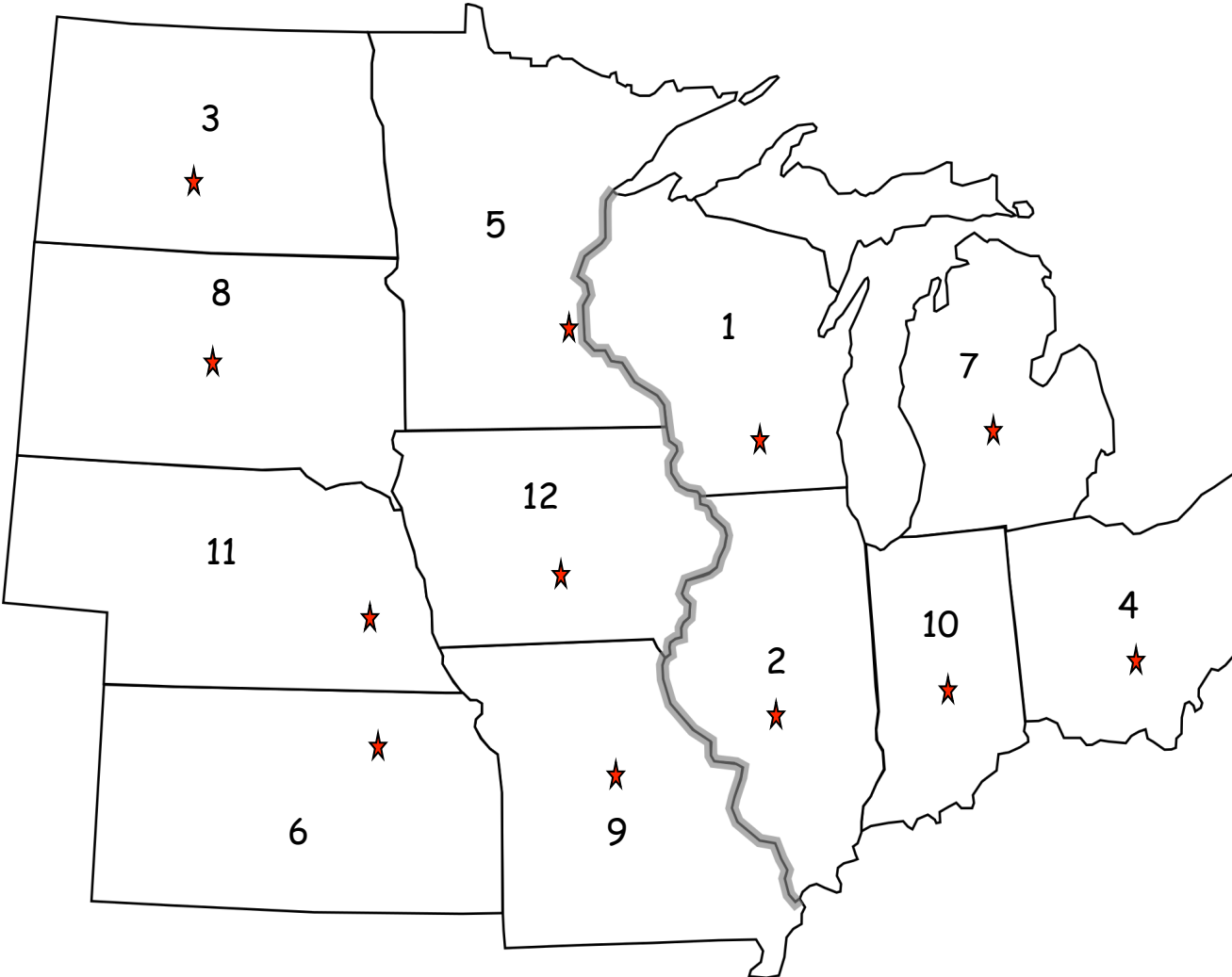
SD (South Dakota)

WI (Wisconsin)

3<sup>rd</sup> Grade- Practice Test #3  
The United States  
**Midwest Region**  
(Answer Key)

Directions:

Take a look at your map. Write the **number** of each state on the line that is after it's name.



- (IL) Illinois \_\_\_\_\_ 2
- (IN) Indiana \_\_\_\_\_ 10
- (IA) Iowa \_\_\_\_\_ 12
- (KS) Kansas \_\_\_\_\_ 6
- (MI) Michigan \_\_\_\_\_ 7
- (MN) Minnesota \_\_\_\_\_ 5
- (MO) Missouri \_\_\_\_\_ 9
- (NE) Nebraska \_\_\_\_\_ 11
- (ND) North Dakota \_\_\_\_\_ 3
- (OH) Ohio \_\_\_\_\_ 4
- (SD) South Dakota \_\_\_\_\_ 8
- (WI) Wisconsin \_\_\_\_\_ 1

3<sup>rd</sup> Grade- Practice Test #3  
The United States  
Midwest Region  
(Answer Key)

States' Capitals

Directions:  
Write the state abbreviation next to the correct capital.

Bismarck	<u>ND</u>	Lincoln	<u>NE</u>
Columbus	<u>OH</u>	Madison	<u>WI</u>
Des Moines	<u>IA</u>	Pierre	<u>SD</u>
Indianapolis	<u>IN</u>	St. Paul	<u>MN</u>
Jefferson City	<u>MO</u>	Springfield	<u>IL</u>
Lansing	<u>MI</u>	Topeka	<u>KS</u>

IL (Illinois)

IN (Indiana)

IA (Iowa)

KS (Kansas)

MI (Michigan)

MN (Minnesota)

MO (Missouri)

NE (Nebraska)

ND (North Dakota)

OH (Ohio)

SD (South Dakota)

WI (Wisconsin)